

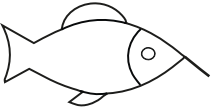
Végezd el a műveleteket! Ügyelj a műveletek sorrendjére! A kapott eredményt írd a halra! Ha kiszámoltad, keresd meg, melyik színes körhöz tartozik és színezd a halat arra a színre!



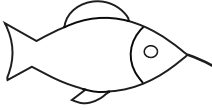
$$2 \cdot (330 - 130) =$$



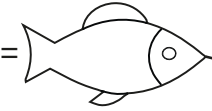
$$240 + 3 \cdot 6 =$$



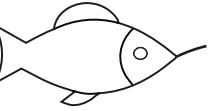
$$4 \cdot 8 + 210 =$$



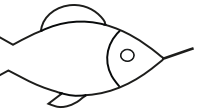
$$(150 + 3) \cdot 2 =$$



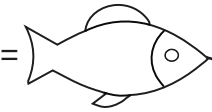
$$550 - 9 \cdot 5 =$$



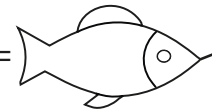
$$7 \cdot 6 - 30 =$$




$$2 \cdot (5 + 140) =$$



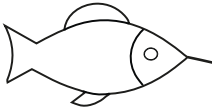
$$(248 - 8) \cdot 2 =$$



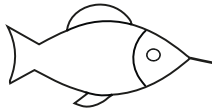
$$2 \cdot (410 - 270) =$$



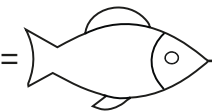
$$320 + 9 \cdot 4 =$$



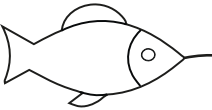
$$7 \cdot 3 + 530 =$$



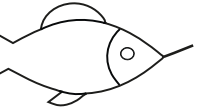
$$(110 + 2) \cdot 2 =$$



$$730 - 6 \cdot 5 =$$



$$9 \cdot 8 - 42 =$$



$$2 \cdot (3 + 227) =$$

